

# NID B.DES

## Mock -3



NAME

BATCH

DATE

TOTAL MARKS- 100

TIME-3 HOURS

### **GENERAL INSTRUCTIONS**

NO MOBILE PHONES ARE ALLOWED DURING THE EXAM YOUR IDEA  
GENERATION AND EXECUTION WILL BE APPRECIATED

NO EXTRA MARKS WILL BE GIVEN IF ANY WORK EXCEEDS THE LIMIT

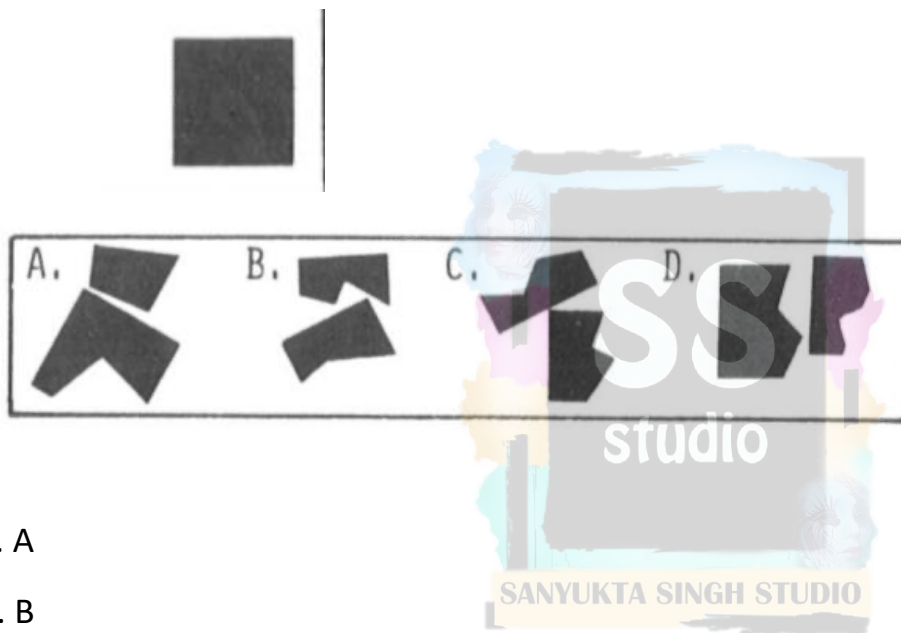
ALL QUESTIONS ARE COMPULSARY

### NID MOCK TEST 14:-

Direction: No. 1 to 14 – 2 Marks each

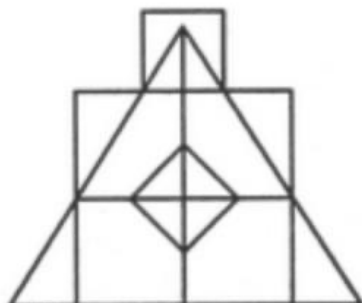
No. 15 to 22- 1 Marks each

1. Each question in this program consists of a numbered picture showing a solid shape and a set of four lettered cut up pattern pieces. For each question, choose the combination of cut-up pieces that, when put together, will make up the shape shown. Pieces may need to be turned around or turned over to make them fit.



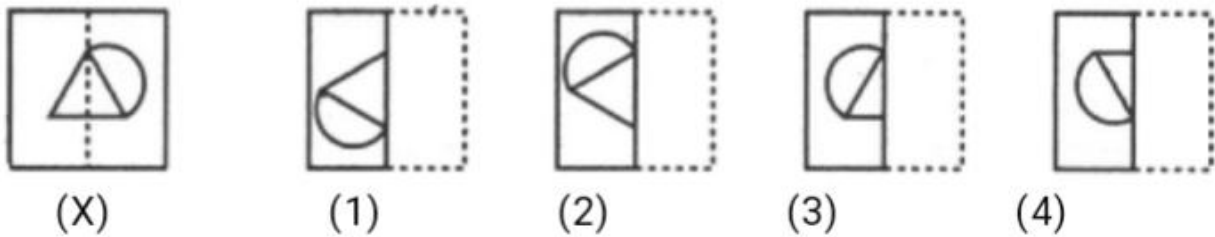
- a. A
- b. B
- c. C
- d. D

2. Count the number of triangles and squares in the given figure.



- A. 21 triangles, 7 squares
- B. 18 triangles, 8 squares
- C. 20 triangles, 8 squares
- D. 22 triangles, 7 squares

3. Find out from amongst the four alternatives as to how the pattern would appear when the transparent sheet is folded at the dotted line



- a. 1
- b. 2
- c. 3
- d. 4

4. Look carefully at the sequence of symbols to find the pattern. Select correct pattern.



- a. 1
- b. 2

c. 3

d. 4

5. Identify the form of art given below:-



a. Telia Rumal

b. Chamba Rumal

c. Ajrakh printing

d. Mata in Pachedi

6. Two bus tickets from city A to B and three tickets from city A to C cost Rs. 77 but three tickets from city A to B and two tickets from city A to C cost Rs. 73. What are the fares for cities B and C from A ?

A. Rs. 4, Rs. 23

B. Rs. 13, Rs. 17

C. Rs. 15, Rs. 14

D. Rs. 17, Rs. 13

7. Which nation's author Annie Ernaux won the 2022 Nobel Prize in Literature?

A. India

B. USA

C. UK

D. France

8. SFURTI MELA is being organized by Khadi and Village Industries Commission in which city?

- A. Patna
- B. New Delhi
- C. Jaipur
- D. Sonipat

9. Fill in the blank :-

Catching the earlier train will give us the \_\_\_\_ to do some shopping.

- A. chance
- B. luck
- C. possibility
- D. occasion

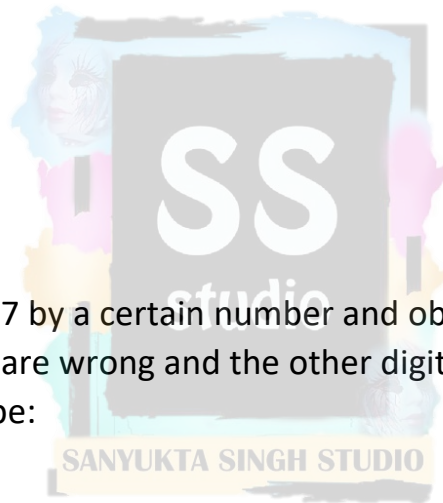
10. A boy multiplied 987 by a certain number and obtained 559981 as his answer. If in the answer both 9 are wrong and the other digits are correct, then the correct answer would be:

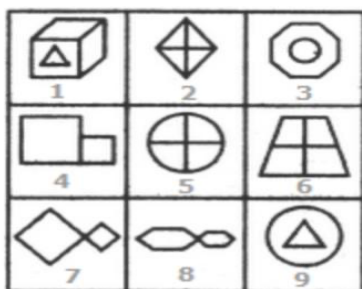
- A. 553681
- B. 555181
- C. 555681
- D. 556581

11. How many prime numbers are less than 50 ?

- A. 16
- B. 15
- C. 14
- D. 18

12. Group the given figures into three classes using each figure only once.





- A. 1,3,9 ; 2,5,6 ; 4,7,8
- B. 1,3,9 ; 2,7,8 ; 4,5,6
- C. 1,2,4 ; 3,5,7 ; 6,8,9
- D. 1,3,6 ; 2,4,8 ; 5,7,9

13. If  $P + Q$  means P is the brother of Q;  $P \times Q$  means P is the wife of Q and  $P \% Q$  means P is the daughter of Q then which of the following means D is the uncle of A?

- A.  $A \% B \times C + D$
- B.  $A \times B + C \% D$
- C.  $A + C \% B \times D$
- D. None of these

14. How many colours the sunlight spectrum has?

- A. Three
- B. Seven
- C. Four
- D. Five

15. Glass is made of the mixture of

- A. quartz and mica
- B. sand and silicates
- C. salt and quartz

D. sand and salt

16. Who is the brand ambassador of McDonald's ?

a. Rashmika Mandanna

b. Kajol

c. Ranveer Singh

d. Sara Ali Khan

17. The 15<sup>th</sup> International Sufi Rang Festival 2022 began in which city?

A. Ajmer

B. Jaipur

C. Kovalam

D. Delhi

18. Which actor has been appointed the new brand ambassador for the Hero MotoCrop

A. Varun Dhawan

B. Salman Khan

C. Akshay Kumar

D. Ram Charan



19. In these series, you will be looking at both the letter pattern and the number pattern. Fill the blank in the middle of the series or end of the series.

QAR, RAS, SAT, TAU, \_\_\_\_\_

A. UAV

B. UAT

C. TAS

D. TAT

20. The Kingston Mall has more stores than the Galleria.

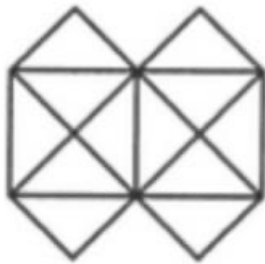
The Four Corners Mall has fewer stores than the Galleria.

The Kingston Mall has more stores than the Four Corners Mall.

If the first two statements are true, the third statement is

- A. true
- B. false
- C. uncertain
- D. None of the above

21. What is the minimum number of straight lines that is needed to construct the figure?



- a. 13
- b. 20
- c. 19
- d. 7



22. Jayanti Patnaik, who died recently, belonged to which party?

- A. BJP
- B. RJD
- C. Congress
- D. AAP



Question 1- Through the following Gestures and expressions, Compose the family of cosmetic items of your choice. You can choose any four to compose your scene. (20 marks )


a) Byzantine

b) Truculent

c) Powerful

d) Glad

e) Old-fashioned




SS  
studio

SANYUKTA SINGH STUDIO

Question 2- You are sitting on one of the benches waiting for your train. Time being flashed on the screen is- 15:30 pm. A family of 3 is passing in front of your eyes, carrying one Red trolley. Also they have a small puppy in their hand. You can easily see the crowd at the other side of the platform too. Some curious faces, some waiting for their train, some chitchatting. Draw the whole scene with your pencil. Do the needful colouring wherever required. ( 15 marks )

SANYUKTA SINGH STUDIO

Question 3- Redesign the Mascot for Amul Butter ( marks- 15)



Question 4- Design the menu card for Indian Railways- “ Rajdhani – Tejas “ (14 marks )

